



Name _____


Horizontal Subtraction


Read the problem. Write the answer under the line.



$5 - 3 = \underline{\quad}$



$4 - 2 = \underline{\quad}$



$7 - 5 = \underline{\quad}$



$8 - 2 = \underline{\quad}$



$6 - 1 = \underline{\quad}$



$9 - 4 = \underline{\quad}$



$3 - 3 = \underline{\quad}$



$10 - 2 = \underline{\quad}$



$7 - 1 = \underline{\quad}$



$5 - 5 = \underline{\quad}$


$9 - 1 = \underline{\quad}$


$8 - 3 = \underline{\quad}$


$4 - 3 = \underline{\quad}$


$6 - 5 = \underline{\quad}$


$7 - 2 = \underline{\quad}$