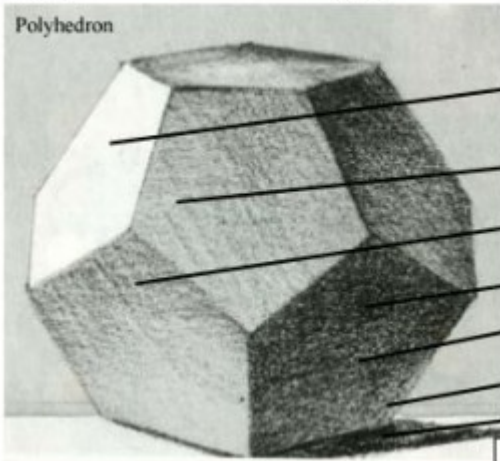


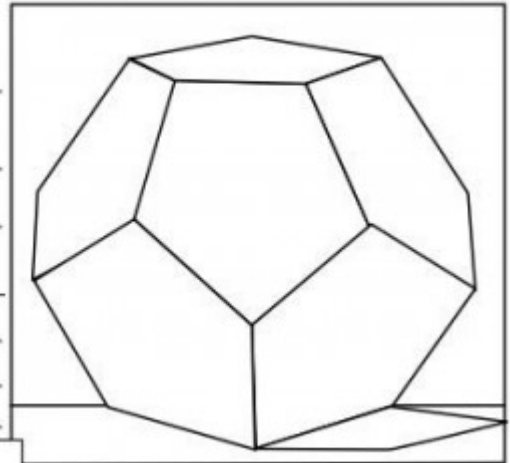
Name:

Hour:


Polyhedron



1. _____
2. _____
3. _____
4. _____
5. _____
6. _____
7. _____



Sphere



Next to the number/letter, write the appropriate term to define the type of lighting the illustration represents. Some of the shadows or light sources might be difficult to define so do your best.

- Highlight • Light • Shadow
- Core of Shadow • Reflective Light
- Cast Shadow

- A. _____
- B. _____
- C. _____
- D. _____
- E. _____
- F. _____
- G. _____

