

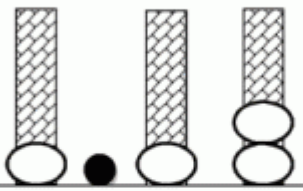
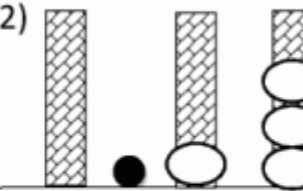
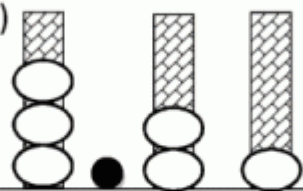
Name

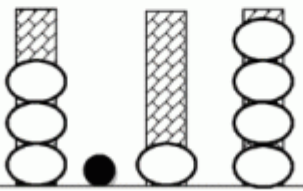
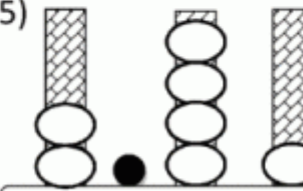
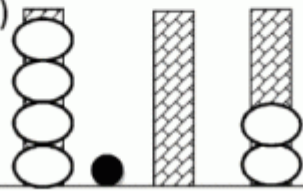
Date



## PLACE VALUE: TENTHS & HUNDREDTHS SHEET 1

Count the number of ONES, TENTHS and HUNDREDTHS then put them together.

|                                                                                      |                                                                                      |                                                                                       |
|--------------------------------------------------------------------------------------|--------------------------------------------------------------------------------------|---------------------------------------------------------------------------------------|
| 1)  | 2)  | 3)  |
| ONES      TENTHS      HUNDTHS                                                        | ONES      TENTHS      HUNDTHS                                                        | ONES      TENTHS      HUNDTHS                                                         |
| How many? 1.12                                                                       | How many?                                                                            | How many?                                                                             |

|                                                                                      |                                                                                      |                                                                                       |
|--------------------------------------------------------------------------------------|--------------------------------------------------------------------------------------|---------------------------------------------------------------------------------------|
| 4)  | 5)  | 6)  |
| ONES      TENTHS      HUNDTHS                                                        | ONES      TENTHS      HUNDTHS                                                        | ONES      TENTHS      HUNDTHS                                                         |
| How many?                                                                            | How many?                                                                            | How many?                                                                             |

|                                     |                                     |                                    |
|-------------------------------------|-------------------------------------|------------------------------------|
| 7) 1 ONES + 2 TENTHS + 3 HUNDREDTHS | 8) 2 ONES + 4 TENTHS + 5 HUNDREDTHS | 9) 7 ONES + 1 TENTH + 6 HUNDREDTHS |
| How many?                           | How many?                           | How many?                          |

|                             |                             |                                      |
|-----------------------------|-----------------------------|--------------------------------------|
| 10) 5 TENTHS + 2 HUNDREDTHS | 11) 2 TENTHS + 3 HUNDREDTHS | 12) 4 ONES + 2 TENTHS + 4 HUNDREDTHS |
| How many?                   | How many?                   | How many?                            |

|                           |                           |                                      |
|---------------------------|---------------------------|--------------------------------------|
| 13) 6 ONES + 8 HUNDREDTHS | 14) 7 ONES + 4 HUNDREDTHS | 15) 4 ONES + 9 TENTHS + 6 HUNDREDTHS |
| How many?                 | How many?                 | How many?                            |

|                                      |                           |                                      |
|--------------------------------------|---------------------------|--------------------------------------|
| 16) 7 ONES + 3 TENTHS + 8 HUNDREDTHS | 17) 9 ONES + 6 HUNDREDTHS | 18) 2 ONES + 4 TENTHS + 2 HUNDREDTHS |
| How many?                            | How many?                 | How many?                            |

Remember to use a decimal point between the ones and the tenths.

