



Student Name: \_\_\_\_\_

Score: \_\_\_\_\_

### Equivalent Fraction Strips


Example:  Shaded part =  $\frac{1}{2}$

Split each part into two equal pieces.

 Shaded part =  $\frac{2}{4}$


Therefore,  $\frac{1}{2} = \frac{2}{4}$

Split each part into 3 equal pieces




$$\frac{1}{2} = \frac{\quad}{\quad}$$

Split each part into 5 equal pieces



$$\frac{1}{2} = \frac{\quad}{\quad}$$

Split each part into 2 equal pieces



$$\frac{1}{3} = \frac{\quad}{\quad}$$

Split each part into 4 equal pieces



$$\frac{2}{3} = \frac{\quad}{\quad}$$

Split each part into 3 equal pieces



$$\frac{3}{4} = \frac{\quad}{\quad}$$

Split each part into 4 equal pieces



$$\frac{1}{4} = \frac{\quad}{\quad}$$

Split each part into 2 equal pieces



$$\frac{3}{5} = \frac{\quad}{\quad}$$

Split each part into 3 equal pieces



$$\frac{4}{5} = \frac{\quad}{\quad}$$