

Name

Date



EQUIVALENT FRACTIONS SHEET 2

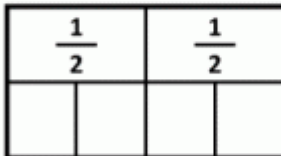
FRACTION STRIPS

Use these fractions strips to help you find the equivalent fractions.

Put the correct fraction into the box and fill in the answers below.

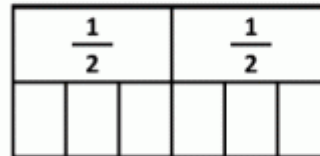


1)



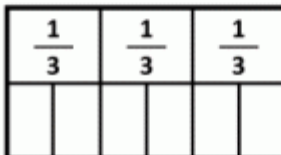
$$\frac{1}{2} = \frac{\quad}{4}$$

2)



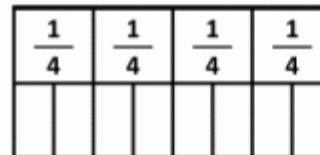
$$\frac{1}{2} = \frac{\quad}{6}$$

3)



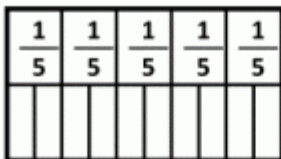
$$\frac{1}{3} = \frac{\quad}{6}$$

4)



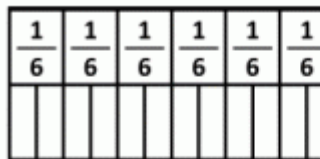
$$\frac{1}{4} = \frac{\quad}{8}$$

5)



$$\frac{1}{5} = \frac{\quad}{10}$$

6)



$$\frac{1}{6} = \frac{\quad}{12}$$

Now use the fraction walls to answer these questions.

7) $\frac{2}{2} = \frac{\quad}{4}$

8) $\frac{3}{4} = \frac{\quad}{8}$

9) $\frac{2}{3} = \frac{\quad}{6}$

10) $\frac{2}{5} = \frac{\quad}{10}$

11) $\frac{3}{3} = \frac{\quad}{6}$

12) $\frac{4}{6} = \frac{\quad}{12}$

13) $\frac{4}{5} = \frac{\quad}{10}$

14) $\frac{5}{6} = \frac{\quad}{12}$



Free Math Sheets, Math Games and Math Help

MATH-SALAMANDERS.COM