


Name: _____

Chicken

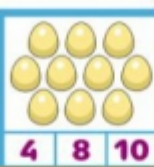
Count the shapes and write the numbers.



Triangle Circle Square Rect



Teacherstg.com



4 8 10



2 3



1 10 4



7 9



3 8 1



4 5

Parents and Ch

Name: _____

Connect correctly



CHI

Name: _____

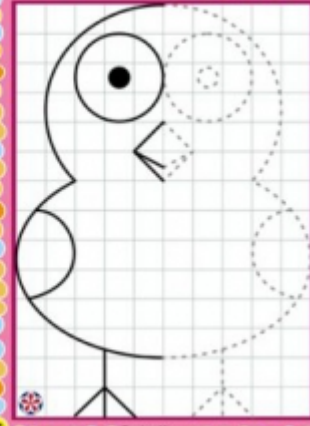
Count the chickens and write the number.



Teacherstg.com

CHICK

Name: _____



Teacherstg.com