
















Determine which letter best represents the length / height.

| Millimeter (mm) | Centimeter (cm) | Meter (m) | Kilometer (km) |
|---|--|---|---|
| A millimeter is about the thickness of a credit card. | 10 mm = 1 cm. The metal portion of a pencil is about 1 cm. A ruler is about 30 centimeters. | 100 cm = 1 m From the floor to a door knob is about 1 meter. | 1,000 m = 1 km Most major roads are at least a kilometer long. |
|  |  |  |  |

Answers

1. _____
2. _____
3. _____
4. _____
5. _____
6. _____
7. _____
8. _____
9. _____

| | | |
|---|--|---|
|  1) Ferris Wheel A. 30 centimeters B. 5 meters C. 50 kilometers D. 23 meters |  2) Screw A. 20 centimeters B. 25 centimeters C. 3 centimeters D. 1 meter |  3) Can of Beans A. 120 centimeters B. 2 meters C. 2 kilometers D. 10 centimeters |
|  4) Flash Drive A. 30 centimeters B. 60 centimeters C. 6 centimeters D. 15 centimeters |  5) Adult Horse A. 90 centimeters B. 2 meters C. 25 millimeters D. 30 centimeters |  6) Recliner A. 60 centimeters B. 1 meter C. 120 centimeters D. 10 millimeters |
|  7) 11 Story Building A. 1 meter B. 3 kilometers C. 335 centimeters D. 30 meters |  8) Key A. 5 centimeters B. 2 meters C. 15 centimeters D. 150 centimeters |  9) Notebook Paper A. 15 centimeters B. 1 meters C. 60 centimeters D. 25 centimeters |