


TWO DIMENSIONAL SHAPES


Color the correct answer.

Which shape is this?



square
rectangle
circle

Which shape is this?







square
triangle
hexagon

mathskills4kids





Names: _____ Class: _____

Select two-dimensional shapes





Mark all the circles.

<input type="checkbox"/>		<input type="checkbox"/>		<input type="checkbox"/>		<input type="checkbox"/>	
--------------------------	---	--------------------------	---	--------------------------	---	--------------------------	---

Mark all the squares.

<input type="checkbox"/>		<input type="checkbox"/>		<input type="checkbox"/>		<input type="checkbox"/>	
--------------------------	---	--------------------------	---	--------------------------	---	--------------------------	---

Mark all the hexagons.

<input type="checkbox"/>		<input type="checkbox"/>		<input type="checkbox"/>		<input type="checkbox"/>	
--------------------------	---	--------------------------	---	--------------------------	---	--------------------------	---


© www.mathskills4kids.com

mathskills4kids



Class: _____

More sides and corners


shape that has more sides

<input type="checkbox"/>		<input type="checkbox"/>	
--------------------------	---	--------------------------	---

shape that has more corners.

<input type="checkbox"/>		<input type="checkbox"/>	
--------------------------	---	--------------------------	---

shape that has more sides

<input type="checkbox"/>		<input type="checkbox"/>	
--------------------------	---	--------------------------	---

© www.mathskills4kids.com