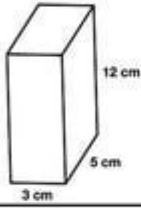


Name: _____

Volume



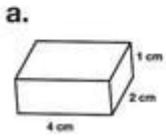
To find the volume of a rectangular prism, multiply the length by the width by the height.

$$\text{Volume} = l \times w \times h$$

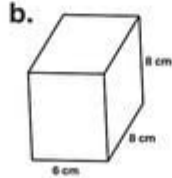
$$\text{Volume} = 3\text{cm} \times 5\text{cm} \times 12\text{cm}$$

$$\text{Volume} = 180\text{cm}^3$$

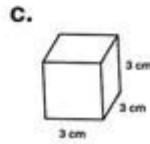
Calculate the volume of each rectangular prism.



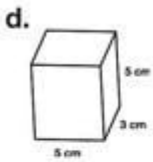
Volume = _____



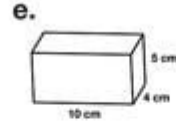
Volume = _____



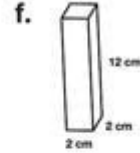
Volume = _____



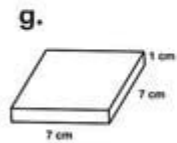
Volume = _____



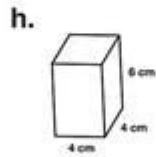
Volume = _____



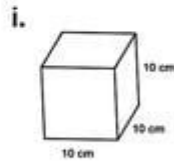
Volume = _____



Volume = _____



Volume = _____



Volume = _____