












Name _____

Butterfly Subtraction

Solve. Draw an X on the butterflies that are subtracted.

 $3 - 1 = \underline{\quad}$	 $5 - 2 = \underline{\quad}$	 $7 - 4 = \underline{\quad}$
 $4 - 2 = \underline{\quad}$	 $10 - 8 = \underline{\quad}$	 $7 - 3 = \underline{\quad}$
 $5 - 1 = \underline{\quad}$	 $8 - 2 = \underline{\quad}$	 $5 - 4 = \underline{\quad}$