


COMPARING WORKSHEETS

mathskills4kids

Name: _____ Class: _____


Comparing: Are there enough?

Are there enough fishes for every cat?




yes no

Are there enough bones for every dog?



yes no

Are there enough apples for every worm?



yes no


© www.mathskills4kids.com

mathskills4kids


Name: _____ Class: _____

re


are



eggs



chick




© www.mathskills4kids.com

mathskills4kids


Name: _____ Class: _____

Comparing: More or less?


Circle the set that has more.



Circle the set that has more.



Circle the set that has less.



© www.mathskills4kids.com

mathskills4kids

Name: _____ Class: _____

Color the correct one

re in a mixed group



star square

Color the correct one



triangle circle

Color the correct one



star square

© www.mathskills4kids.com