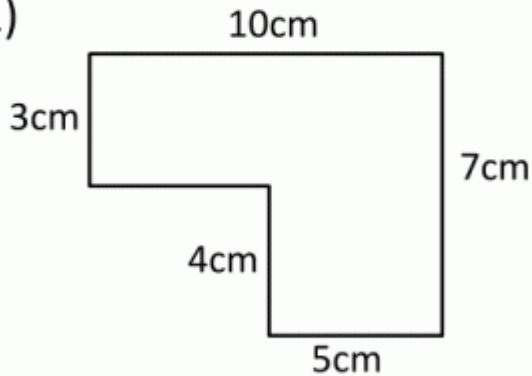




## AREA AND PERIMETER SHEET 4

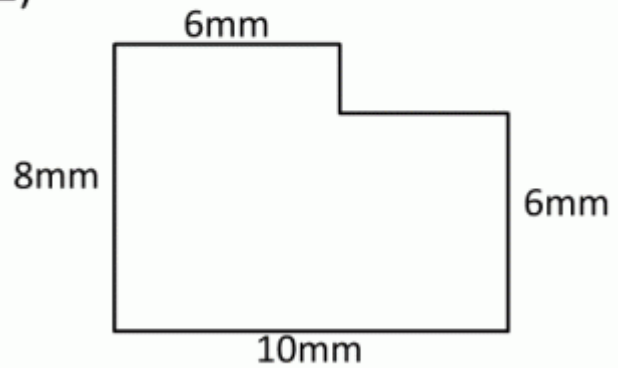
Work out the area and perimeter of the following shapes by finding the missing sides. The shapes are not to scale.

1)

Area = \_\_\_\_\_ square cm (cm<sup>2</sup>)

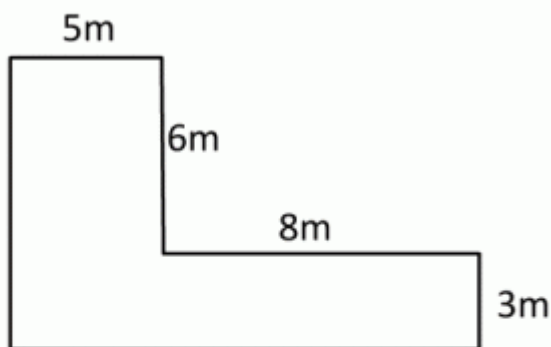
Perimeter = \_\_\_\_\_ m

2)

Area = \_\_\_\_\_ square mm (mm<sup>2</sup>)

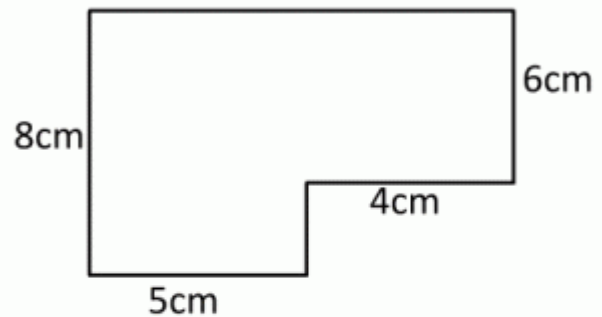
Perimeter = \_\_\_\_\_ mm

3)

Area = \_\_\_\_\_ square m (m<sup>2</sup>)

Perimeter = \_\_\_\_\_ m

4)

Area = \_\_\_\_\_ square cm (cm<sup>2</sup>)

Perimeter = \_\_\_\_\_ cm

