





# HOW MANY ARE THERE?

COUNT ALL THE FISH

	<b>3</b>
	<b>1</b>
	<b>2</b>
	<b>4</b>

	<b>7</b>
	<b>5</b>
	<b>6</b>
	<b>4</b>

	<b>4</b>
	<b>6</b>
	<b>5</b>
	<b>2</b>

	<b>7</b>
	<b>6</b>
	<b>8</b>
	<b>3</b>