

Flowerbed Perimeter

Look at these flowerbeds that a school's gardening club have been working on. Can you calculate the perimeter of each flowerbed?

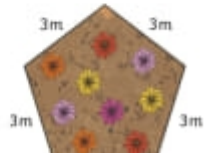
Each square on the grid represents 1m.



_____ m



_____ m




Flowerbed Perimeter

Look at these flowerbeds that a school's gardening club have been working on. Can you calculate the perimeter of each flowerbed?

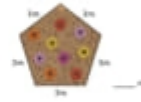
Each square on the grid represents 1m.



_____ m



_____ m



_____ m

Can you draw a flowerbed with a perimeter of 12m? Each square on the grid represents 1m.



ink saving Eco