



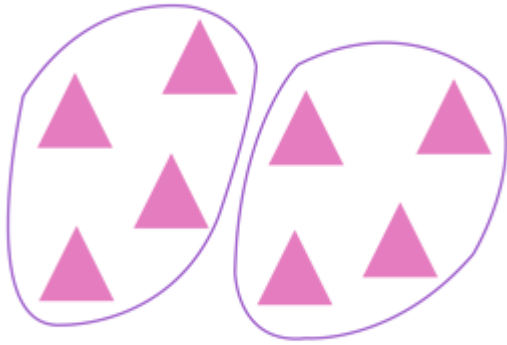
NAME _____ DATE _____

OBJECTS IN ROWS AND COLUMNS

Compose arrays from rows and columns and count to find the total using objects.

Example:

Circle groups of 4. Then draw the triangles into 2 equal rows.



Solution:




2 groups of 4 = 8.

1) Circle groups of 2. Redraw the groups of 2 as rows and then as columns.



Solution:




__ groups of __ = __.

2) Circle groups of 3. Redraw the groups of 3 as rows and then as columns.



Solution:



__ groups of __ = __.