



Multiplication Rows and Columns

Name: _____ Class: _____


Write the multiplication sentences for the rows and columns.




___ x ___ = ___
___ x ___ = ___




___ x ___ = ___
___ x ___ = ___




___ x ___ = ___
___ x ___ = ___




___ x ___ = ___
___ x ___ = ___




___ x ___ = ___
___ x ___ = ___




___ x ___ = ___
___ x ___ = ___




___ x ___ = ___
___ x ___ = ___




___ x ___ = ___
___ x ___ = ___




___ x ___ = ___
___ x ___ = ___



___ x ___ = ___
___ x ___ = ___



___ x ___ = ___
___ x ___ = ___



___ x ___ = ___
___ x ___ = ___