



NAME _____

DATE _____

OBJECTS IN ROWS AND COLUMNS

Compose arrays from rows and columns and count to find the total using objects.

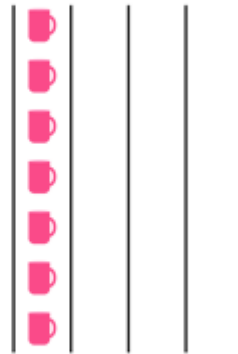
1) Circle groups of 7. Redraw the groups of 7 as rows and then as columns.




Solution:



__ groups of __ = __.




2) Circle groups of 5. Redraw the groups of 5 as rows and then as columns.




Solution:



__ groups of __ = __.



3) Circle groups of 10. Redraw the groups of 10 as rows and then as columns.



Solution:



__ groups of __ = __.

