

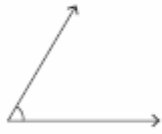
Name : _____

Score : _____

Classifying Angles

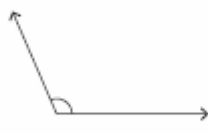
Classify each angle as acute, obtuse, right or straight.

1)



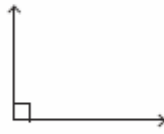
Type : _____

2)



Type : _____

3)



Type : _____

4)



Type : _____

5)



Type : _____

6)



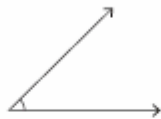
Type : _____

7)



Type : _____

8)



Type : _____

9)



Type : _____

10)

49°

Type : _____

11)

82°

Type : _____

12)

180°

Type : _____