













Name

Date



SUBTRACTION PROBLEMS TO 15 SHEET 1

		WORKING OUT
1)	There are 12  . 3  are eaten. How many are left? _____	
2)	I have 10¢. I spend 2¢. How much money do I have now? _____ ¢	
3)	There are 11  in a shop. 4  get sold. What is 11 minus 4? _____	
4)	Tyger has 9  . Sally has 7  . What is the difference? _____	
5)	There are 13  . 3  pop. How many  are left? _____	
6)	There are 12  . 5  hop away. How many  are left? _____	