




Name _____

Interpreting Data From A Tally Graph

Complete the graph and use the data to answer the questions.

Our Favorite Ice Cream Flavor

Flavor	Tally Marks	#
chocolate		
vanilla		
strawberry		

1. How many people like chocolate? _____
2. How many people like vanilla? _____
3. How many people like strawberry? _____
4. Which had the most? _____
5. Which had the least? _____
6. How many more people like strawberry than chocolate? _____