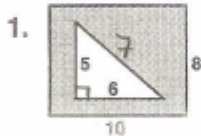


Name \_\_\_\_\_

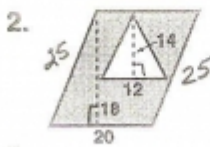
# Workin' Out in Math

**What does a brontosaurus get if it works too many math problems at once?**

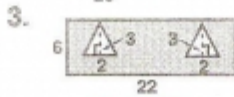
To find out, find the area of each shaded region below. Circle the letter that represents each area. Place the circled letters in the blanks at the bottom of the page above the corresponding problem numbers.



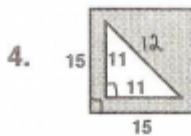
(D) 65      (S) 75      (I) 60



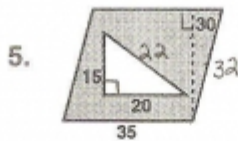
(U) 270      (I) 276      (G) 200



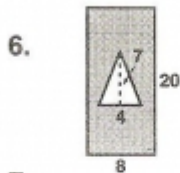
(N) 126      (P) 120      (Y) 125



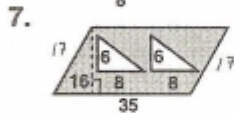
(A) 165      (L) 170.5      (O) 164.5



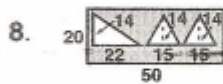
(S) 900      (T) 980      (H) 908



(E) 150      (O) 146      (K) 140



(A) 510      (R) 512      (O) 525



(O) 632      (C) 600      (E) 636

1      2      3      4      5      6      7      8