




Subtraction Using Ten Frames


 $14-5$

 $17-9$

 $11-8$

 $13-3$

 $16-8$

 $20-7$

* This worksheet helps practice subtraction (1-20). Filling the frame can be done using either *5-in-a-row approach* OR by *populating-in-pairs*. "Take Off" if using counters OR "Cross Off" if using dots to fill the cells.