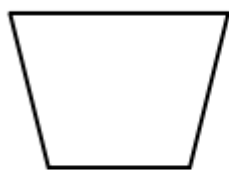



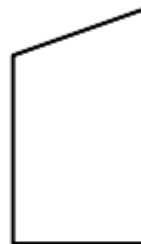
2. Find and draw all lines of symmetry for the following figures. Write the number of lines of symmetry that you found in the blank underneath the shape.



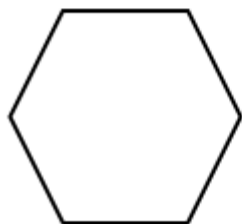
a. _____



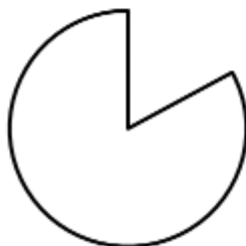
b. _____



c. _____



d. _____



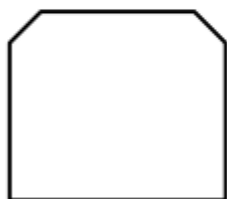
e. _____




f. _____



g. _____



h. _____



i. _____