



Addition with Ten Frames

Use the 10 frames to help you answer each question. Color the hearts needed using 2 different colors.



$8 + 5 =$



$10 + \underline{\quad} =$




$9 + 7 =$



$10 + \underline{\quad} =$



$9 + 3 =$



$10 + \underline{\quad} =$




$7 + 8 =$



$10 + \underline{\quad} =$



$8 + 9 =$



$10 + \underline{\quad} =$



$7 + 7 =$



$10 + \underline{\quad} =$

