

Compare 2-digit Numbers

16 practice worksheets

6 math vocabulary posters

Name: _____ Date: _____

1 More/Less, 10 More/Less
Use a Number Chart

Directions: Complete the part of the hundreds chart to show 1 more, 1 less, 10 more, and 10 less.

	63		

	45		

9-2

Name: _____ Date: _____

Using a Number Line
Using Math Symbols

Directions: Use the number line to write a number or the symbols $<$ or $>$ to make each correct.

42 43 44 45 46 47 48 49 50 51 52 53 54

$46 < \underline{\quad}$	$53 \bigcirc$
$\underline{\quad} > 50$	$62 < \underline{\quad}$
$57 \bigcirc 51$	$\underline{\quad} >$
$44 \bigcirc 52$	$64 \bigcirc$


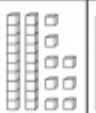


61 62 63 64 65 66 67 68 69 70 71 72 73





$77 \bigcirc 68$	$\underline{\quad} <$
	$65 \bigcirc$

Name: _____ Date: _____

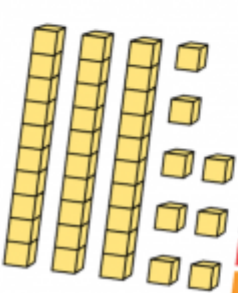

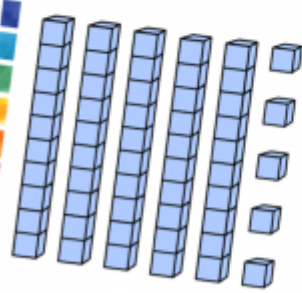
Comparing Numbers
Greater Than/ Less Than

Directions: Write the numbers shown by each set of place value blocks. Then circle greater than or less than to compare the numbers.

			
$\underline{\quad}$ is greater than $\underline{\quad}$	$\underline{\quad}$ is greater than $\underline{\quad}$	$\underline{\quad}$ is greater than $\underline{\quad}$	$\underline{\quad}$ is greater than $\underline{\quad}$
$\underline{\quad}$ is less than $\underline{\quad}$	$\underline{\quad}$ is less than $\underline{\quad}$	$\underline{\quad}$ is less than $\underline{\quad}$	$\underline{\quad}$ is less than $\underline{\quad}$

			
$\underline{\quad}$ is greater than $\underline{\quad}$	$\underline{\quad}$ is greater than $\underline{\quad}$	$\underline{\quad}$ is greater than $\underline{\quad}$	$\underline{\quad}$ is greater than $\underline{\quad}$
$\underline{\quad}$ is less than $\underline{\quad}$	$\underline{\quad}$ is less than $\underline{\quad}$	$\underline{\quad}$ is less than $\underline{\quad}$	$\underline{\quad}$ is less than $\underline{\quad}$

greater than >
a number is bigger than the other



55 is greater than 42

