


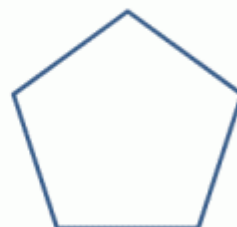
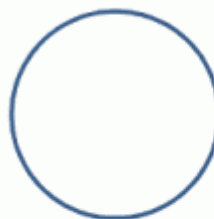
Name _____

Date _____



SHADE THE CIRCLES SHEET 1

Shade all the **circles** below.



How many circles can you count? _____



Free Math Sheets, Math Games and Math Help

MATH-SALAMANDERS.COM