





Name _____

Date _____



MONEY PROBLEMS SHEET 1B

Captain is having a yard sale of some of his toys.

soft toy cat	basketball	toy car	tractor
			
5¢	12¢	6¢	10¢

- Which toy is the cheapest? _____
- Which toy is the most expensive? _____
- How much does the cat and basketball cost? _____
- How much does the tractor and car cost? _____
- Which two toys could I buy for exactly 11¢?

6) Frazer has the coins below. Tick the toys he could buy.



cat	<input type="checkbox"/>
basketball	<input type="checkbox"/>
car	<input type="checkbox"/>
tractor	<input type="checkbox"/>

7) Sally buys the car. She pays with a dime.

How much money will she have left? _____