







Name: \_\_\_\_\_

# Estimate & Measure

**Directions:** Estimate the length of each object to the nearest inch, then measure using a ruler.

	Estimate	Actual
1. 	_____ in	_____ in
2. 	_____ in	_____ in
3. 	_____ in	_____ in
4. 	_____ in	_____ in
5. 	_____ in	_____ in
6. 	_____ in	_____ in

Write the actual measurements in order from **shortest** to **longest**.

1. \_\_\_\_\_ 2. \_\_\_\_\_ 3. \_\_\_\_\_ 4. \_\_\_\_\_ 5. \_\_\_\_\_ 6. \_\_\_\_\_