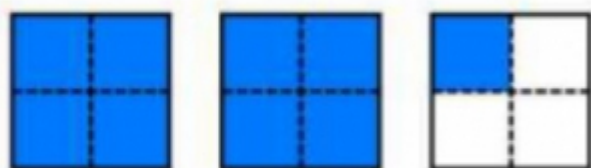


# Mixed Numbers

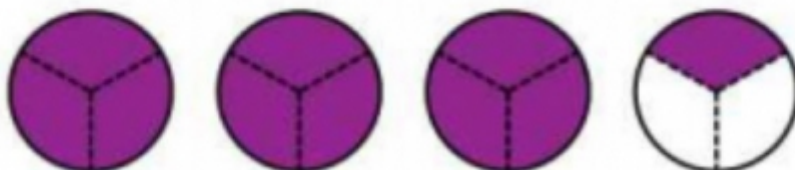
Write a mixed number to show what part of each illustration is shaded.

a.



\_\_\_\_\_

b.



\_\_\_\_\_

c.



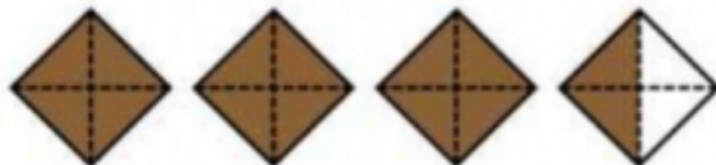
\_\_\_\_\_

d.



\_\_\_\_\_

e.



\_\_\_\_\_

f.



\_\_\_\_\_