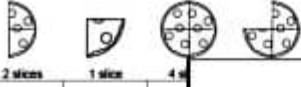


Name: _____

Solve the story using the clues. Fill in the chart using Y for yes or N for no. The pizza slices in the picture show how many slices each person ate.












	2 slices	1 slice	4 slices
Ryan			
Anna			
Joseph			
Lauren			

The Story
Four people ate pizza. Can you figure out how many slices each person ate?




- The Clues**
1. Anna ate more than 2 slices of pizza.
 2. Ryan ate less than 2 slices of pizza.
 3. Joseph ate less than 4 slices of pizza.
 4. Lauren ate more than 3 slices of pizza.



edHelper.com

Name: _____










Puzzle				Work Area			
			23			23	
			26			26	
			15			15	
24	20	20	+	24	20	20	+

The sum for each column and row is given.




 = _____  = _____  = _____

 = _____  = _____

Name: _____

Puzzle				Work Area			
			17			17	
			15			15	
			15			15	
16	15	16	+	16	15	16	+

The sum for each column and row is given.

 = _____  = _____  = _____

Word and object names are equal in value. www.edHelper.com ©2018. All rights reserved.

Critical Thinking