

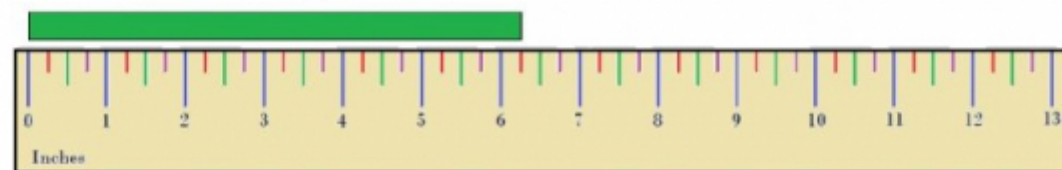
I Can Read in Quarter Inches!

Please make sure to include fractions in your answers (ex. $1 \frac{1}{4}$).

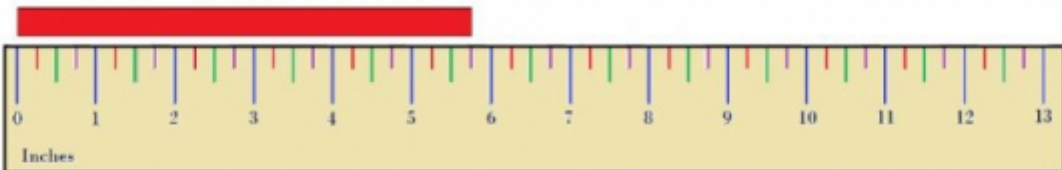
1. How long is the **pink** ribbon? It is _____ inches long.



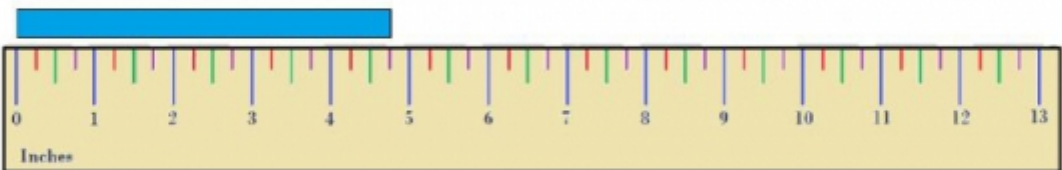
2. How long is the **green** ribbon? It is _____ inches long.



3. How long is the **red** ribbon? It is _____ inches long.



4. How long is the **blue** ribbon? It is _____ inches long.



5. How long is the **brown** ribbon? It is _____ inches long.

