


Name

Date




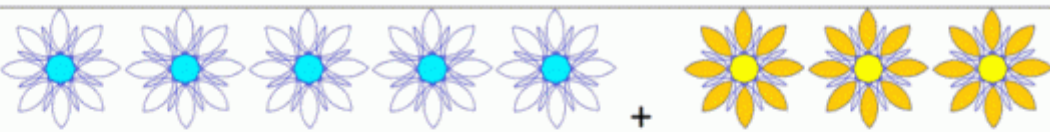
ADDITION SENTENCES TO 10 SHEET 4


Write the addition sentence that matches each picture.

1)  +
 $4 + 3 = 7$

2)  +
___ + ___ = ___

3)  +
___ + ___ = ___

4)  +
___ + ___ = ___

5)  +
___ + ___ = ___

6)  +
___ + ___ = ___