

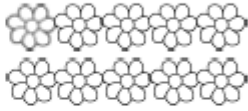


Name \_\_\_\_\_

# Bee Garden Subtraction

Solve. Draw an X on the pictures that are subtracted.

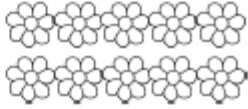
$10 - 2 = \underline{\quad}$



$5 - 2 = \underline{\quad}$



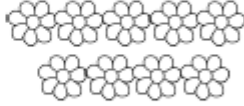
$10 - 5 = \underline{\quad}$



$8 - 7 = \underline{\quad}$



$9 - 4 = \underline{\quad}$



$6 - 5 = \underline{\quad}$

