



Name: _____

Top or Bottom?

Directions: Look at the  in the pictures below. Is the  at the top of the object, or at the bottom? Circle top or bottom.



top bottom



top bottom



top bottom



top bottom




top bottom



top bottom



top bottom



top bottom



top bottom