

Count the number of acute, obtuse and right angles in each shape.

1)

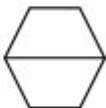


Acute = ___

Obtuse = ___

Right = ___

2)



Acute = ___

Obtuse = ___

Right = ___

3)



Acute = ___

Obtuse = ___

Right = ___

4)




Acute = ___

Obtuse = ___

Right = ___

5)



Acute = ___

Obtuse = ___

Right = ___

6)

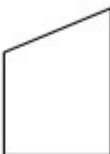


Acute = ___

Obtuse = ___

Right = ___

7)



Acute = ___

Obtuse = ___

Right = ___

8)



Acute = ___

Obtuse = ___

Right = ___

9)



Acute = ___

Obtuse = ___

Right = ___

10)



Acute = ___

Obtuse = ___

Right = ___