

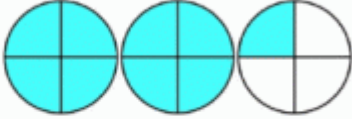
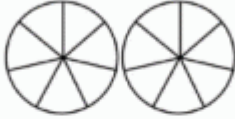










Name

Date



IMPROPER FRACTION TO MIXED NUMBER SHEET 2

Shade the fraction diagrams to work out the mixed numbers. The first one is done for you.

1)  $\frac{9}{4} = 2 \frac{1}{4}$	7)  $\frac{12}{7} =$
2)  $\frac{10}{3} =$	8)  $\frac{8}{2} =$
3)  $\frac{5}{2} =$	9)  $\frac{13}{6} =$
4)  $\frac{15}{4} =$	10)  $\frac{19}{8} =$
5)  $\frac{12}{5} =$	11)  $\frac{13}{9} =$
6)  $\frac{11}{6} =$	12)  $\frac{23}{10} =$