

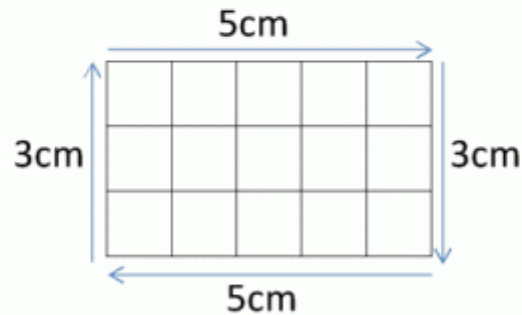
Name

Date



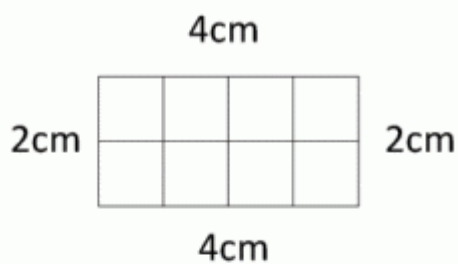
PERIMETER SHEET 1

To find the perimeter of a rectangle, simply work out the distance all the way round the outside of the rectangle. The perimeter of the rectangle below is $5 + 3 + 5 + 3 = 16\text{cm}$.



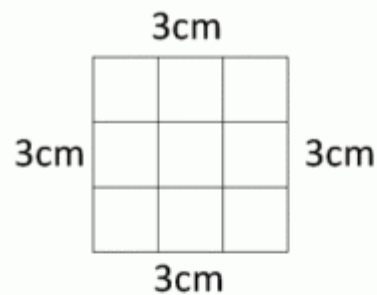
Work out the perimeter of the following rectangles:

1)



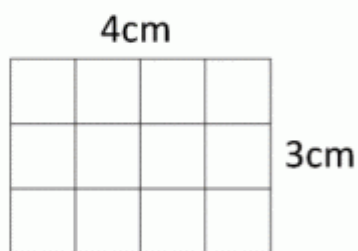
Perimeter = _____ cm

2)



Perimeter = _____ cm

3)



Perimeter = _____ cm

4)



Perimeter = _____ cm

