

Name: _____

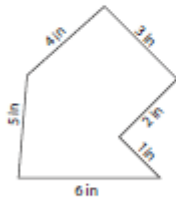
Score: _____

Perimeter - Irregular Shapes

Sheet 1

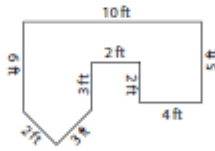
Find the perimeter of each shape.

1)



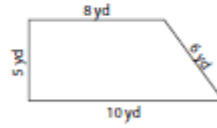
Perimeter =

2)



Perimeter =

3)



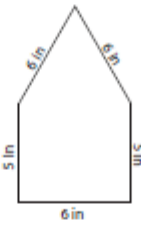
Perimeter =

4)



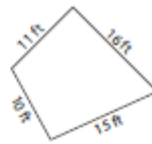
Perimeter =

5)



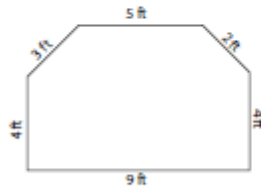
Perimeter =

6)



Perimeter =

7)



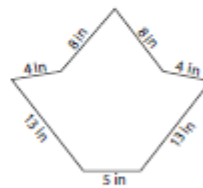
Perimeter =

8)



Perimeter =

9)



Perimeter =