



Name _____

Ocean Addition

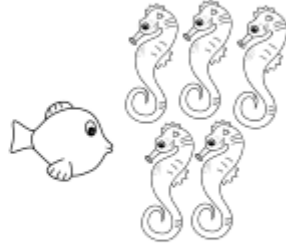
Add. Use the pictures for help.



$3 + 2 = \underline{\quad}$




$2 + 4 = \underline{\quad}$




$1 + 5 = \underline{\quad}$



$4 + 5 = \underline{\quad}$




$3 + 2 = \underline{\quad}$




$4 + 1 = \underline{\quad}$



$6 + 3 = \underline{\quad}$



$4 + 2 = \underline{\quad}$



$2 + 2 = \underline{\quad}$