

Name: _____

Special Number

The special number is

349

Write the number in expanded form.

300 + _____ + _____

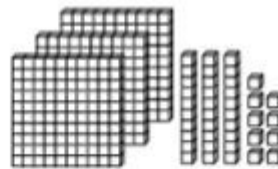
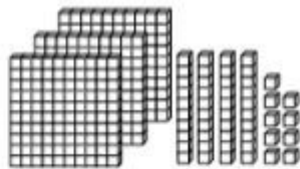
The value of the digit 3 is _____.

The value of the digit 4 is _____.

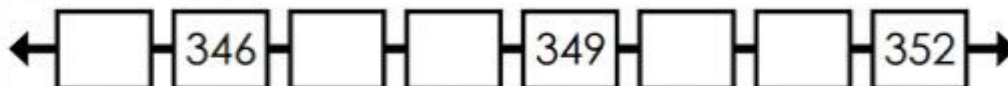
The value of the digit 9 is _____.

even**odd**_____ **tens**_____ **ones**_____ **hundreds**

Which set of blocks shows 349? (Circle one.)



Fill in the empty boxes on the number line.



10 more than 349 is _____.

10 less than 349 is _____.

100 more than 349 is _____.

100 less than 349 is _____.

Compare. <, >, or =

349 347348 349349 350