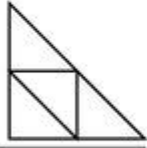





FRACTIONS OF SHAPES 3

Shade the correct fraction of each shape.


Remember $\frac{1}{4}$ means 1 out of every 4!



Shade $\frac{1}{2}$



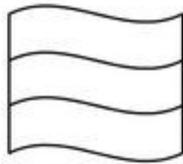
Shade $\frac{4}{7}$



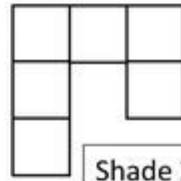
Shade $\frac{1}{4}$



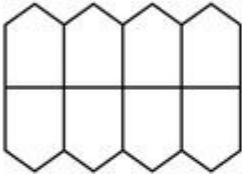
Shade $\frac{1}{3}$



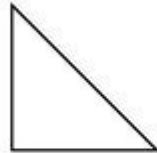
Shade $\frac{2}{3}$



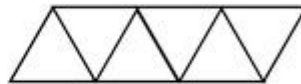
Shade $\frac{1}{2}$



Shade $\frac{3}{4}$



Shade $\frac{1}{2}$



Shade $\frac{2}{3}$