







Measuring Length Worksheet

Directions: Measure each bar in inches and centimeters. Record your answers for the questions below.

- A** 
- B** 
1. About how many inches longer is A than B? _____
2. About how many centimeters longer is A than B? _____
- C** 
- D** 
3. About how many inches longer is C than D? _____
4. About how many centimeters longer is C than D? _____
- E** 
- F** 
5. About how many inches longer is E than F? _____
6. About how many centimeters longer is E than F? _____
- A** 
- B** 
7. About how many inches longer is A than B? _____
8. About how many centimeters longer is A than B? _____
- C** 
- D** 
9. About how many inches longer is C than D? _____
10. About how many centimeters longer is C than D? _____
- E** 
- F** 
11. About how many inches longer is E than F? _____
12. About how many centimeters longer is E than F? _____



Measuring Length Worksheet

Directions: Measure each bar in inches and centimeters. Record your answers for the questions below.

- A** 
- B** 
1. About how many inches longer is A than B? _____
2. About how many centimeters longer is A than B? _____
- C** 
- D** 
3. About how many inches longer is C than D? _____
4. About how many centimeters longer is C than D? _____
- E** 
- F** 
5. About how many inches longer is E than F? _____
6. About how many centimeters longer is E than F? _____
- A** 

ink saving Eco