

Name: _____

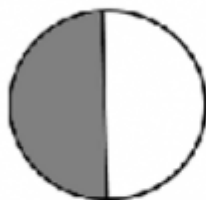
Date: _____

1. Dave has 3 green marbles, 4 red marbles and 2 yellow marbles. What fraction of marbles is red?

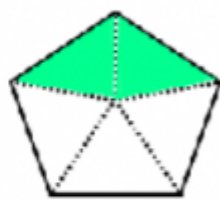
2. What fraction of the spinner is purple?



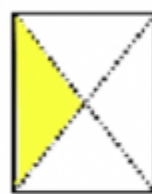
3. Which picture is shaded $\frac{2}{5}$?



A



B



C



D